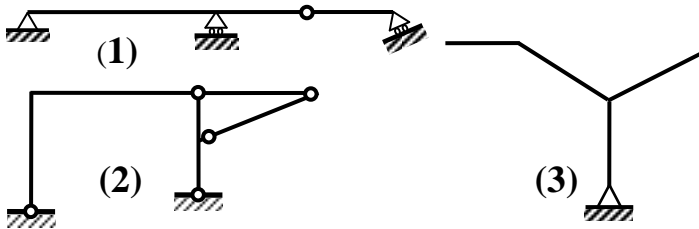
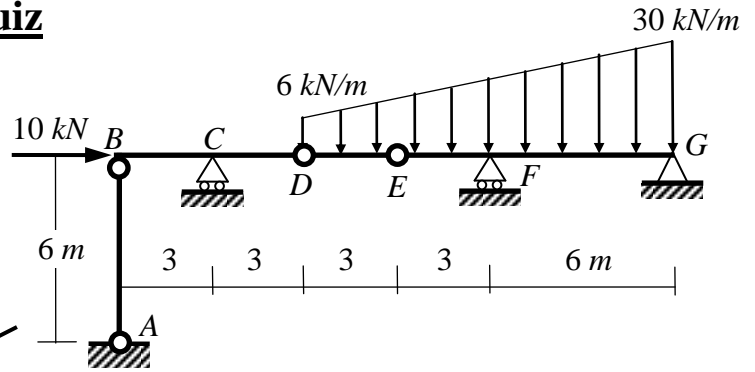


Quiz

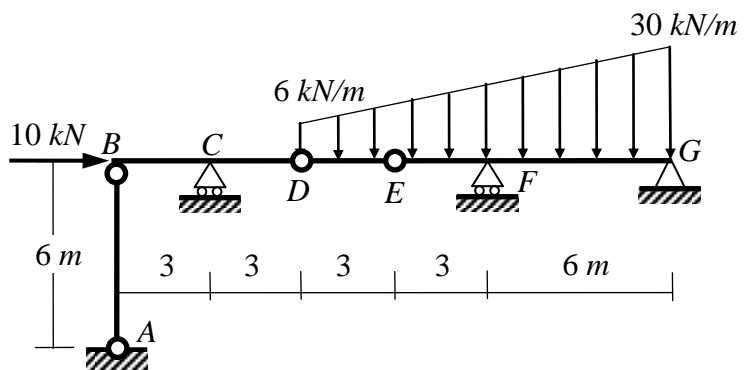
Question (1): (10 Marks)

- (a) For the shown structure, determine the reactions at the supports *A*, *C*, *F* and *G*.
 (b) Determine whether each of the shown **3** structures is stable or unstable. If stable, determine whether it is statically determinate or indeterminate.



Solution:

- (1)
 (2)
 (3)



Final Reactions